

Name : \_\_\_\_\_

Score : \_\_\_\_\_

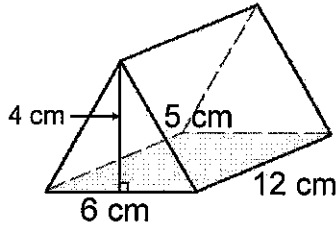
Teacher : \_\_\_\_\_

Date : \_\_\_\_\_

### Surface Area of Prisms and Pyramids

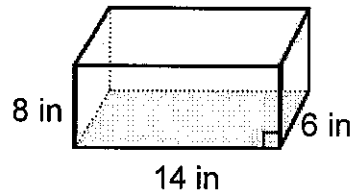
Find the surface area of each figure. Round answers to the nearest hundredth, if necessary.

1)



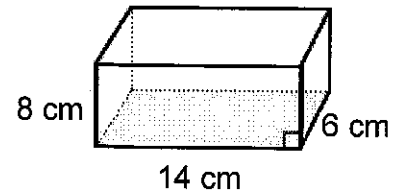
Surface Area: \_\_\_\_\_

2)



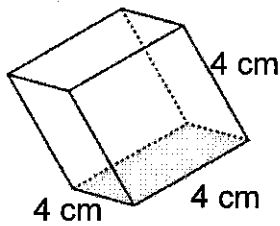
Surface Area: \_\_\_\_\_

3)



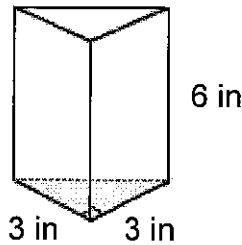
Surface Area: \_\_\_\_\_

4)



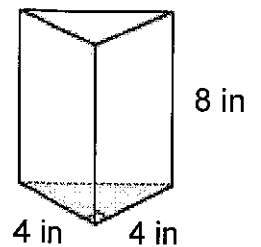
Surface Area: \_\_\_\_\_

5)



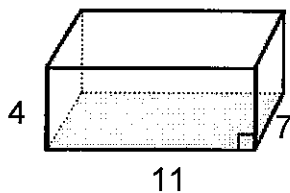
Surface Area: \_\_\_\_\_

6)



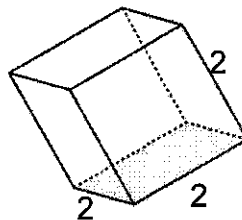
Surface Area: \_\_\_\_\_

7)



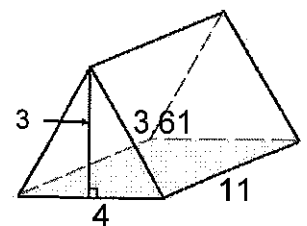
Surface Area: \_\_\_\_\_

8)



Surface Area: \_\_\_\_\_

9)



Surface Area: \_\_\_\_\_

