

Standard 7.G.5 (M)

Angle Practice

Directions: Find the measure of $\angle x$ in each diagram below.

1.

Answer: _____

4.

Answer: _____

2.

Answer: _____

5.

Answer: _____

3.

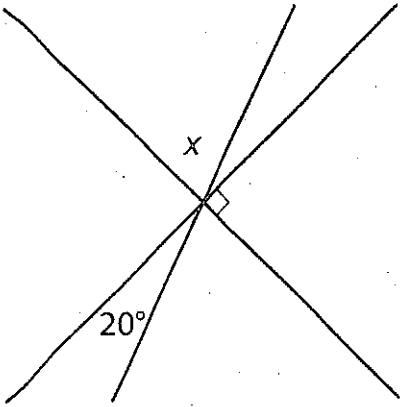
Answer: _____

6.

Answer: _____

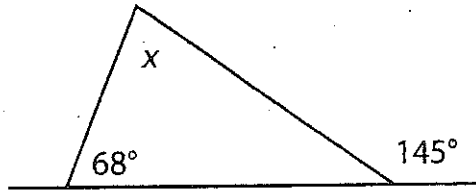
continue to next page

7.



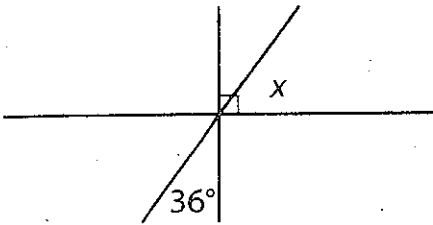
Answer: _____

10.



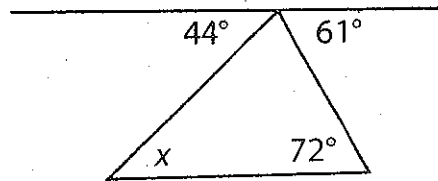
Answer: _____

8.



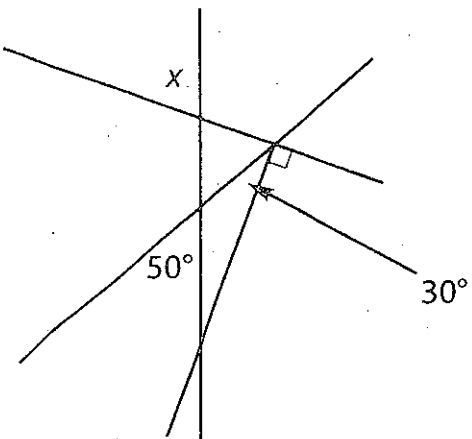
Answer: _____

11. Challenge!



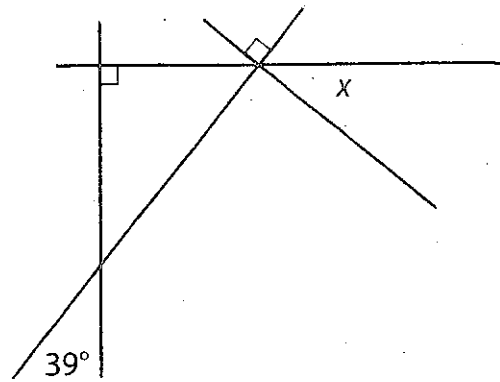
Answer: _____

9.



Answer: _____

12. Challenge!



Answer: _____