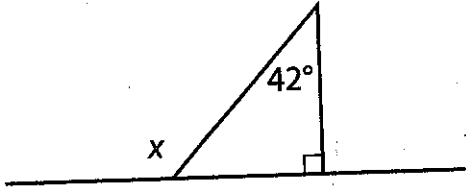


Standard 7.G.5 (M)

**Angle Practice**

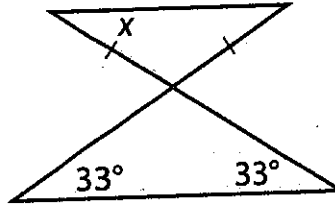
**Directions:** Find the measure of  $\angle x$  in each diagram below.

1.



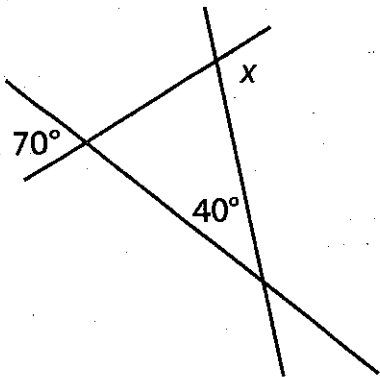
Answer: \_\_\_\_\_

4.



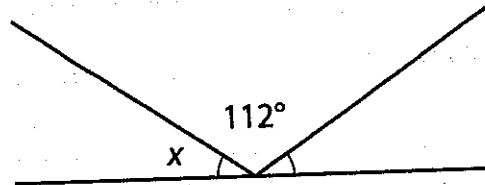
Answer: \_\_\_\_\_

2.



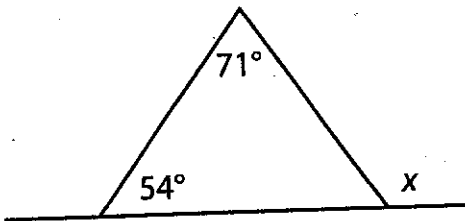
Answer: \_\_\_\_\_

5.



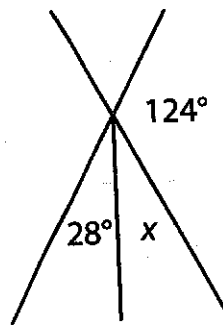
Answer: \_\_\_\_\_

3.



Answer: \_\_\_\_\_

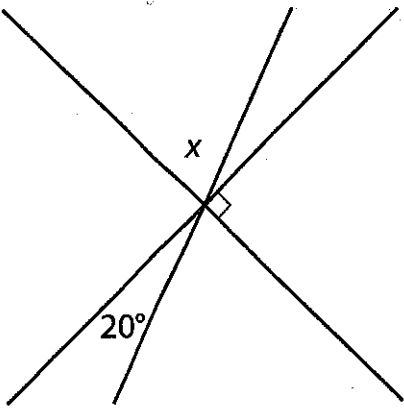
6.



Answer: \_\_\_\_\_

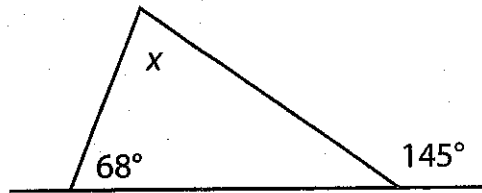
continue to next page

7.



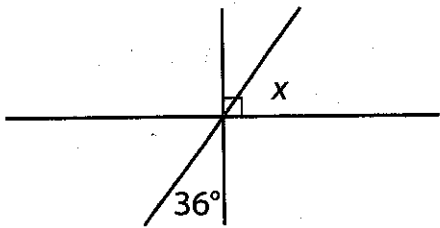
Answer: \_\_\_\_\_

10.



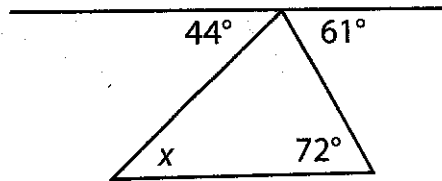
Answer: \_\_\_\_\_

8.



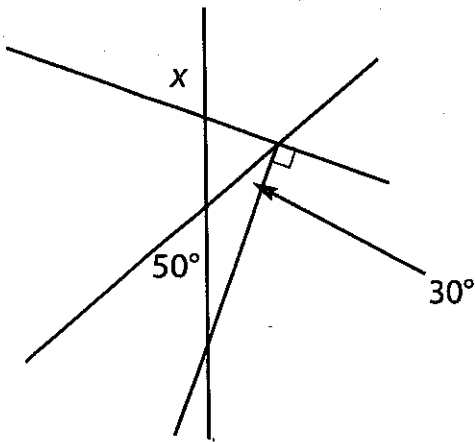
Answer: \_\_\_\_\_

11. Challenge!



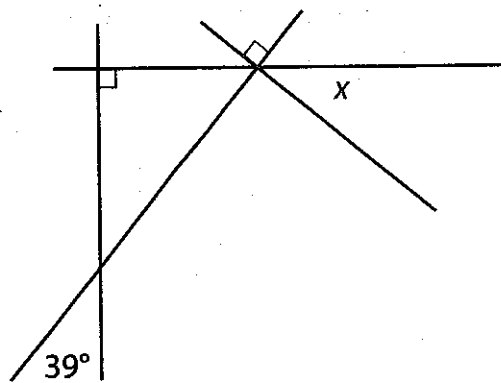
Answer: \_\_\_\_\_

9.



Answer: \_\_\_\_\_

12. Challenge!



Answer: \_\_\_\_\_