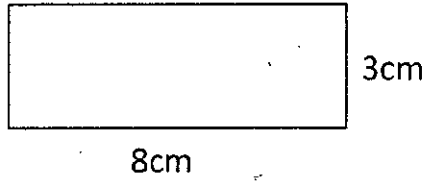


MATH 7 AREA STUDY GUIDE NAME _____

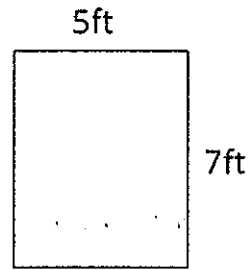
Work out the area of the following rectangles. They are not to scale.

1)



AREA = _____

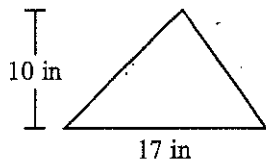
2)



AREA = _____

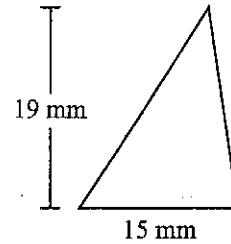
Find the area of each triangle. Units are not to scale.

③



AREA = _____

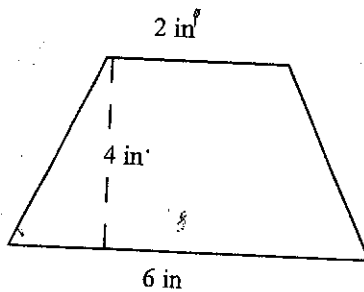
④



AREA = _____

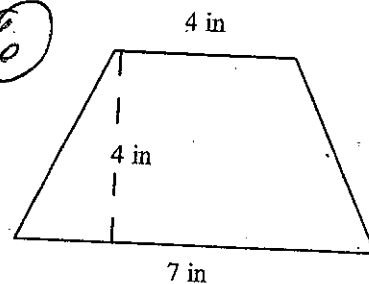
FIND THE AREA OF EACH TRAPEZOID.

⑤



Area _____

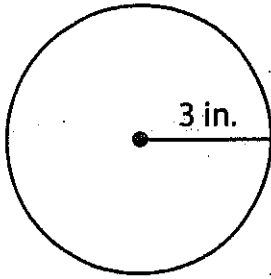
⑥



Area _____

FIND RADIUS, DIAMETER, CIRCUMFERENCE & AREA.

7



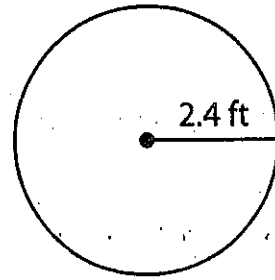
RADIUS = _____

DIAMETER = _____

CIRCUMFERENCE = _____

AREA = _____

8



RADIUS = _____

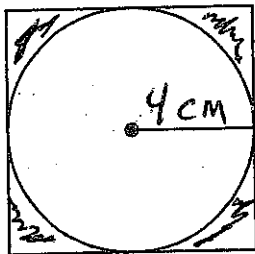
DIAMETER = _____

CIRCUMFERENCE = _____

AREA = _____

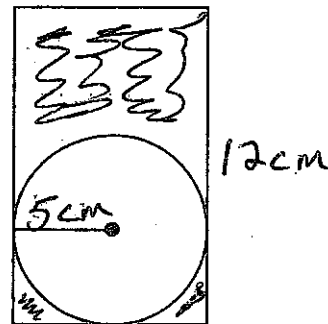
FIND THE AREA OF THE SHADED REGIONS.

9



Answer: _____

10



Answer: _____